
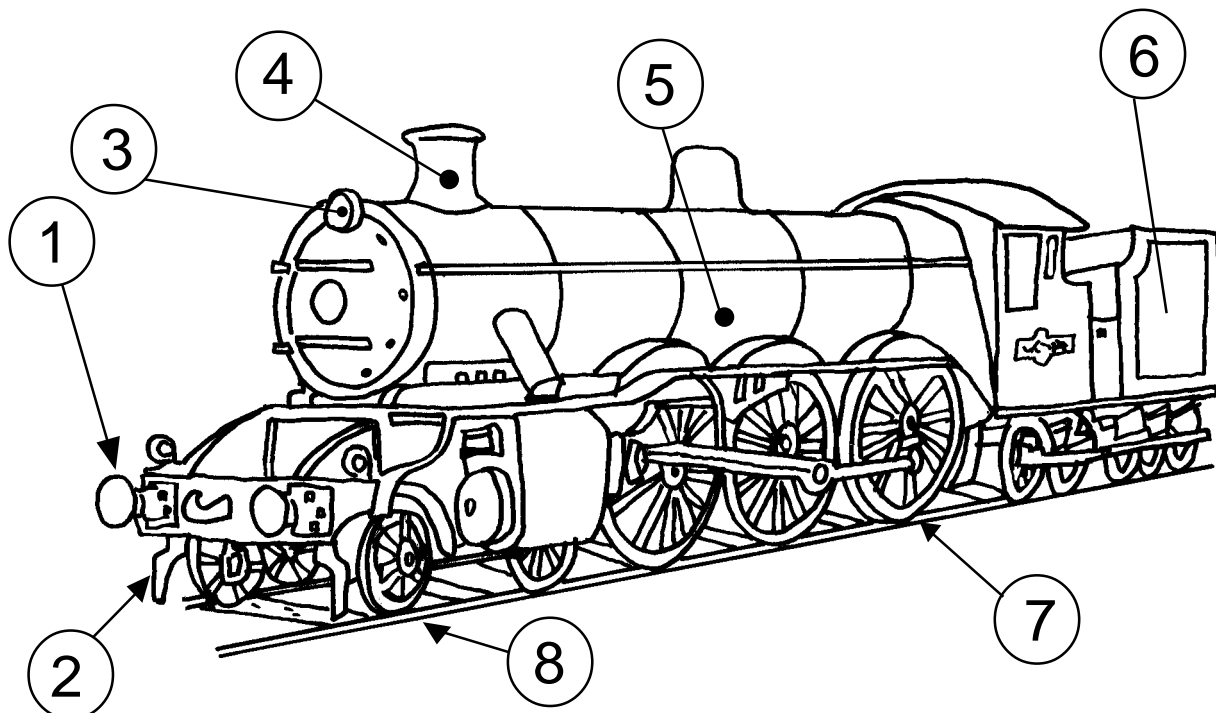


13. LES LOCOMOTORES DE VAPOR (2)






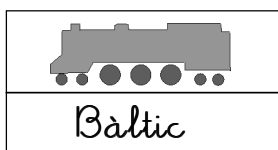

Data:

LES LOCOMOTORES DE VAPOR TENIEN UNES RODES GRANS I UNES ALTRES DE PETITES.



- | | | | |
|--------------------------|------------------|--------------------------|-------------|
| <input type="checkbox"/> | TÈNDER | <input type="checkbox"/> | LLEVAPEDRES |
| <input type="checkbox"/> | RODES MOTRIUS | <input type="checkbox"/> | CALDERA |
| <input type="checkbox"/> | RODES PORTADORES | <input type="checkbox"/> | XEMENEIA |
| <input type="checkbox"/> | FAR | <input type="checkbox"/> | TOPALL |

QUINA ÉS LA DEL DIBUIX?



Anotar els números al costat de la paraula corresponent / Colorejar el requadre del model que està representat en la part superior (cal tenir en compte que les màquines es classificaven segons les rodes que portaven a cada costat.